


Compare these numbers. Circle the number that is greater. Then write the correct sign for each problem.

> is greater than

< is less than


= is equal to

1




145

○




154

2




220

○




215

3




237

○




234

4



140

○



228

5

hundreds	tens	ones
2	3	0

230

○

hundreds	tens	ones
2	0	3

203

6

hundreds	tens	ones
2	2	7

227

○

hundreds	tens	ones
1	7	2

172



Tell how you know which number is greater.


Compare each set of numbers. Circle the true statement.
Then write the correct sign for each problem.

> is greater than

< is less than

= is equal to

1



215 is greater than 213.

215 is less than 213.

215 is equal to 213.

215 ○ 213

2

hundreds	tens	ones
8	4	5
8	4	1

845 is greater than 841.

845 is less than 841.

845 is equal to 841.

845 ○ 841

3

hundreds	tens	ones
7	3	9
7	7	9

739 is greater than 779.

739 is less than 779.

739 is equal to 779.

739 ○ 779

Write the correct sign for each problem.

4

347 ○ 374

5

681 ○ 918

6

720 ○ 702

7

457 ○ 475

8

167 ○ 171

9

297 ○ 297



Tell how you know when a number is less than the other number.

Compare each set of numbers.
Then write the correct sign for each problem.

> is greater than

< is less than

= is equal to

1

hundreds	tens	ones
6	3	2
6	4	1

632 ○ 641

2

hundreds	tens	ones
7	2	1
4	3	0

721 ○ 430

3 631 ○ 913

4 802 ○ 802

5 654 ○ 954

6 179 ○ 181

7 218 ○ 128

8 709 ○ 706

9 454 ○ 462

10 308 ○ 311

11 577 ○ 574

12 356 ○ 356



Tell how you know which symbol to write.

Solve.

- 1 Sally has 231 baseball cards. Matt has 229 baseball cards. Who has a greater number of baseball cards?
- 2 The cheese store sold 329 pounds of cheese on Monday. They sold 259 pounds of cheese on Tuesday. On which day did they sell more cheese?

Circle the correct answer for each problem.

- 3 Claudia has 623 beads in her collection. Liv has 632 beads. Who has more beads?
 - a) Claudia
 - b) Liv
 - c) They have an equal number of beads
- 4 Claudia has 623 beads in her collection. If she trades 5 beads to Liv for 5 beads, how many will Claudia have?
 - a) 618 beads
 - b) 613 beads
 - c) 623 beads
 - d) 628 beads